

Mrs. Beshavard
1st Grade

Week Five

4/27 – 5/1

MISSING addend word problems

Name: _____

Read the word problem. Draw pictures in the box to help you solve the word problem. Write the missing addend of the equation on the line.

Mike caught 8 bugs. Then he caught some more bugs. Now he has 12 bugs. How many more bugs did Mike catch?

$$8 + \underline{\quad} = 12$$

There are 14 flowers in the garden. 7 of them are yellow and the rest are red. How many flowers are red?

$$7 + \underline{\quad} = 14$$

My friend brought 20 cupcakes to class for her birthday. 14 of them were chocolate and the rest were vanilla. How many cupcakes were vanilla?

$$14 + \underline{\quad} = 20$$

Jess saw 11 worms in the ground. 6 of the worms were long and the rest were short. How many worms were short?

$$6 + \underline{\quad} = 11$$

There are 15 kids at the park. 7 of the kids are boys and the rest are girls. How many kids are girls?

$$7 + \underline{\quad} = 15$$



















Jack ate 4 grapes. His brother ate more than him. In all, they ate 13 grapes. How many grapes did Jack's brother eat?

$$4 + \underline{\quad} = 13$$



















Create and solve a double digit addition equation using the key below.

Name: _____

DOUBLE DIGIT Addition

 23	 45	 61	 37	 52	 28	 46	 19	 30
 54	 32	 41	 13	 64	 15	 53	 42	 25

Match the symbol below to the symbol in the key above. Write the numbers next to the symbols to create a double digit addition equation and find the sum.


  + _____	  + _____	  + _____
  + _____	  + _____	  + _____
  + _____	  + _____	  + _____

Name: _____



Color the coins that are needed to buy each flower.


Shopping for Flowers





26¢




37¢




52¢




45¢




19¢



75¢



23¢



30¢



Blooming Vowels

Name: _____

Use the key to color the pictures by the correct long vowel. Write the word on the line in the correct long vowel category.

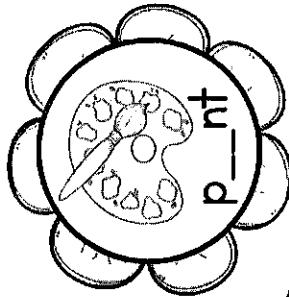





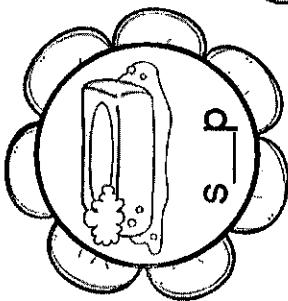


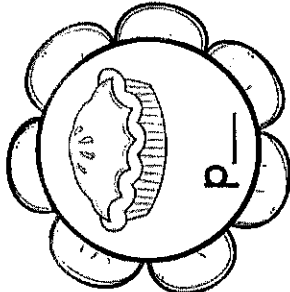



ea= blue

ai= red

oa= green

ie= purple



ea	ai	oa	ie
_____	_____	_____	_____
_____	_____	_____	_____
_____	_____	_____	_____

Circle the conjunction that completes the sentence. Write the conjunction on the line.

Name: _____



CONJUNCTIONS



Mike _____ Sam are going to the park.

but

so

and

Do you want some chips _____ grapes?

for

or

but

I am getting a pink cookie _____ it is my favorite color.

so

or

because

My room was a mess, _____ I cleaned it up.

so

because

or

I will bring my red _____ blue ball.

and

but

for

We want to play outside, _____ it is raining.

or

so

but

Birds can fly _____ they have wings.

but


because

so

Read the words on the lily pads. Help the frog get to the boy by coloring ONLY the lily pads that have a plural word.

Name: _____

HOPPING TO PLURALS



birds

kites

frogs

kids

bee

cloud

stick

park

rain

boxes

cats

foxes

buses

hats

dirt

pond

boots

chicks

farm

eggs

bikes

girls

toys

jars

book

snail

plant

cake

coat


dishes

leaves

stars

cups

trees



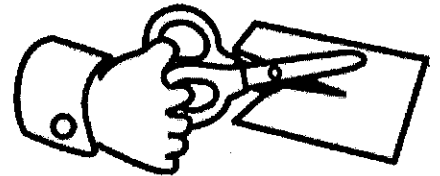
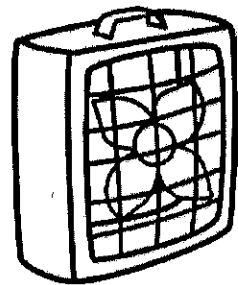

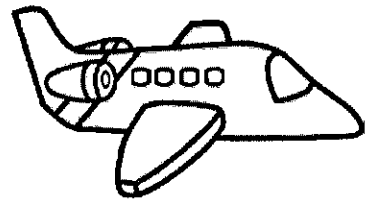

Write a sentence using one of the plural words from above.

Name _____

Date _____

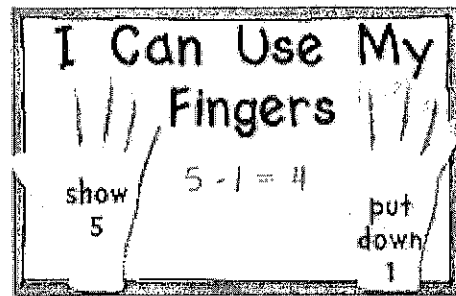
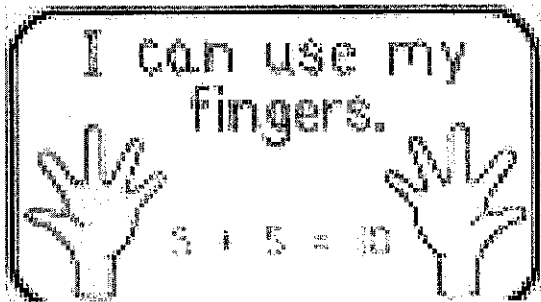
Perfect Pairs

Draw a line from each picture on the left to the picture that rhymes with it on the right.



Name: _____

Use your fingers to solve the problems.



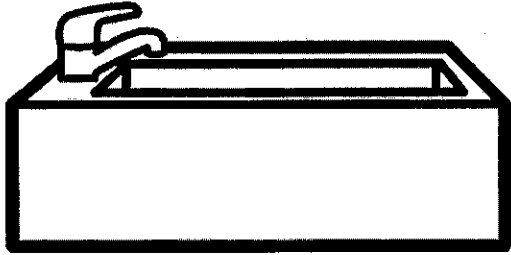
$\begin{array}{r} 12 \\ + 4 \\ \hline \end{array}$	$\begin{array}{r} 15 \\ + 7 \\ \hline \end{array}$	$\begin{array}{r} 15 \\ - 4 \\ \hline \end{array}$	$\begin{array}{r} 14 \\ - 7 \\ \hline \end{array}$
$\begin{array}{r} 15 \\ + 5 \\ \hline \end{array}$	$\begin{array}{r} 10 \\ + 6 \\ \hline \end{array}$	$\begin{array}{r} 16 \\ - 8 \\ \hline \end{array}$	$\begin{array}{r} 11 \\ - 4 \\ \hline \end{array}$
$\begin{array}{r} 13 \\ + 4 \\ \hline \end{array}$	$\begin{array}{r} 9 \\ + 3 \\ \hline \end{array}$	$\begin{array}{r} 10 \\ - 6 \\ \hline \end{array}$	$\begin{array}{r} 16 \\ - 5 \\ \hline \end{array}$

Name _____


Date _____

Rhyme Time


Circle the rhyming word in the box under each picture.



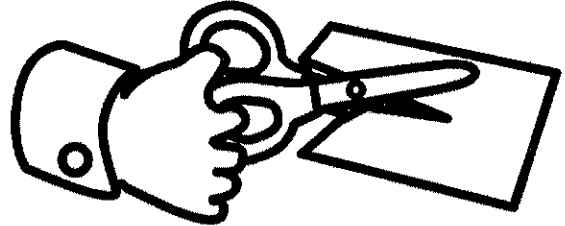
sub rug




fun mug




run hut



hug but

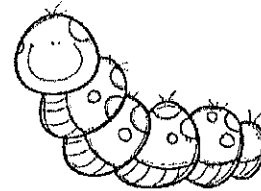



jug nut



cub pup

Numbers 401 - 500



Fill in the gaps below.

401		403							410
				415					
	432					437			
							448		
		463				467			
	482			485					
									500